

## ||| Chapter 6

# Multiple Linear Regression (solutions to exercises)

# Contents

<b>6</b>	<b>Multiple Linear Regression (solutions to exercises)</b>	<b>1</b>
6.1	Nitrate concentration . . . . .	4
6.2	Multiple linear regression model . . . . .	7
6.3	MLR simulation exercise . . . . .	12

## Import Python packages

```
# Import all needed python packages
import numpy as np
import matplotlib.pyplot as plt
import pandas as pd
import scipy.stats as stats
import statsmodels.formula.api as smf
import statsmodels.api as sm
```

## 6.1 Nitrate concentration

### |||| Exercise 6.1 Nitrate concentration

In order to analyze the effect of reducing nitrate loading in a Danish fjord, it was decided to formulate a linear model that describes the nitrate concentration in the fjord as a function of nitrate loading, it was further decided to correct for fresh water runoff. The resulting model was

$$Y_i = \beta_0 + \beta_1 x_{1,i} + \beta_2 x_{2,i} + \varepsilon_i, \quad \varepsilon_i \sim N(0, \sigma^2), \quad (6-1)$$

where  $Y_i$  is the natural logarithm of nitrate concentration,  $x_{1,i}$  is the natural logarithm of nitrate loading, and  $x_{2,i}$  is the natural logarithm of fresh water run off.

- a) Which of the following statements are assumed fulfilled in the usual multiple linear regression model?
- 1)  $\varepsilon_i = 0$  for all  $i = 1, \dots, n$ , and  $\beta_j$  follows a normal distribution
  - 2)  $E[x_1] = E[x_2] = 0$  and  $V[\varepsilon_i] = \beta_1^2$
  - 3)  $E[\varepsilon_i] = 0$  and  $V[\varepsilon_i] = \beta_1^2$
  - 4)  $\varepsilon_i$  is normally distributed with constant variance, and  $\varepsilon_i$  and  $\varepsilon_j$  are independent for  $i \neq j$
  - 5)  $\varepsilon_i = 0$  for all  $i = 1, \dots, n$ , and  $x_j$  follows a normal distribution for  $j = \{1, 2\}$

### |||| Solution

- 1)  $\varepsilon_i$  follows a normal distribution with expectation equal zero, but the realizations are not zero, and further  $\beta_j$  is deterministic and hence it does not follow a distribution ( $\hat{\beta}_j$  does), hence 1) is not correct
- 2)- 3) There are no assumptions on the expectation of  $x_j$  and the variance of  $\varepsilon$  equal  $\sigma^2$ , not  $\beta_1^2$  hence 2) and 3) are not correct
- 4) Is correct, this is the usual assumption about the errors
- 5) Is incorrect since  $\varepsilon_j$  follow a normal distribution, further there are no distributional assumptions on  $x_j$ . In fact we assume that  $x_j$  is known

The parameters in the model were estimated in Python and the following results are available (slightly modified output from summary):

OLS Regression Results						
Dep. Variable:	y	R-squared:	0.3438			
Model:	OLS	Adj. R-squared:	0.3382			
No. Observations:	240	F-statistic:	62.07			
Covariance Type:	nonrobust	Prob (F-statistic):	2.2e-16			
	coef	std err	t	P> t	[0.025	0.975]
Intercept	-2.36500	0.222	-10.661	<2e-16	*	*
x1	0.4762	0.062	7.720	3.25e-13	*	*
x2	0.0827	0.070	1.185	0.273	*	*

- b) What are the parameter estimates for the model parameters ( $\hat{\beta}_i$  and  $\hat{\sigma}_{\beta_i}^2$ ) and how many degrees of freedom are there in the estimation?

### ||| Solution

The number of degrees of freedom is equal  $n - (p + 1)$ , and since the number of observations is  $n = 240$  and  $p = 2$ , we get  $df = 240 - (2 + 1) = 237$ . The parameters are given in the first column of the the first column of the summary table, i.e.

$$\hat{\beta}_0 = -2.365 \quad (6-2)$$

$$\hat{\beta}_1 = 0.476 \quad (6-3)$$

$$\hat{\beta}_2 = 0.083 \quad (6-4)$$

and the estimated standard errors for the parameters are given in the second column:

$$\hat{\sigma}_{\beta_0} = 0.222 \quad (6-5)$$

$$\hat{\sigma}_{\beta_1} = 0.062 \quad (6-6)$$

$$\hat{\sigma}_{\beta_2} = 0.070 \quad (6-7)$$

- c) Calculate the usual 95% confidence intervals for the parameters ( $\beta_0, \beta_1$ , and  $\beta_2$ ).

## ||| Solution

From Theorem 6.5 we know that the confidence intervals can be calculated by

$$\hat{\beta}_i \pm t_{1-\alpha/2} \hat{\sigma}_{\beta_i},$$

where  $t_{1-\alpha/2}$  is based on 237 degrees of freedom, and with  $\alpha = 0.05$ , we get  $t_{0.975} = 1.97$ . The standard errors for the estimates is the second column of the summary, and the confidence intervals become

$$\hat{\beta}_0 = -2.365 \pm 1.97 \cdot 0.222 \quad (6-8)$$

$$\hat{\beta}_1 = 0.467 \pm 1.97 \cdot 0.062 \quad (6-9)$$

$$\hat{\beta}_2 = 0.083 \pm 1.97 \cdot 0.070 \quad (6-10)$$

- d) On level  $\alpha = 0.05$  which of the parameters are significantly different from 0, also find the  $p$ -values for the tests used for each of the parameters?

## ||| Solution

We can see directly from the confidence intervals above that  $\beta_0$  and  $\beta_1$  are significantly different from zero (the confidence intervals does not cover zero), while we cannot reject that  $\beta_2 = 0$  (the confidence interval cover zero). The  $p$ -values we can see directly in the Python output: for  $\beta_0$  is less than  $10^{-16}$  and the  $p$ -value for  $\beta_1$  is  $3.25 \cdot 10^{-13}$ , i.e. very strong evidence against the null hypothesis in both cases.

## 6.2 Multiple linear regression model

### |||| Exercise 6.2 Multiple linear regression model

The following measurements have been obtained in a study:

No.	1	2	3	4	5	6	7	8	9	10	11	12	13
$y$	1.45	1.93	0.81	0.61	1.55	0.95	0.45	1.14	0.74	0.98	1.41	0.81	0.89
$x_1$	0.58	0.86	0.29	0.20	0.56	0.28	0.08	0.41	0.22	0.35	0.59	0.22	0.26
$x_2$	0.71	0.13	0.79	0.20	0.56	0.92	0.01	0.60	0.70	0.73	0.13	0.96	0.27
No.	14	15	16	17	18	19	20	21	22	23	24	25	
$y$	0.68	1.39	1.53	0.91	1.49	1.38	1.73	1.11	1.68	0.66	0.69	1.98	
$x_1$	0.12	0.65	0.70	0.30	0.70	0.39	0.72	0.45	0.81	0.04	0.20	0.95	
$x_2$	0.21	0.88	0.30	0.15	0.09	0.17	0.25	0.30	0.32	0.82	0.98	0.00	

It is expected that the response variable  $y$  can be described by the independent variables  $x_1$  and  $x_2$ . This imply that the parameters of the following model should be estimated and tested

$$Y_i = \beta_0 + \beta_1 x_1 + \beta_2 x_2 + \varepsilon_i, \quad \varepsilon_i \sim N(0, \sigma^2).$$

- a) Calculate the parameter estimates ( $\hat{\beta}_0$ ,  $\hat{\beta}_1$ ,  $\hat{\beta}_2$ , and  $\hat{\sigma}^2$ ), in addition find the usual 95% confidence intervals for  $\beta_0$ ,  $\beta_1$ , and  $\beta_2$ .

You can copy the following lines to Python to load the data:

```
df = pd.DataFrame({
    'x1': [0.58, 0.86, 0.29, 0.20, 0.56, 0.28, 0.08, 0.41, 0.22,
          0.35, 0.59, 0.22, 0.26, 0.12, 0.65, 0.70, 0.30, 0.70,
          0.39, 0.72, 0.45, 0.81, 0.04, 0.20, 0.95],
    'x2': [0.71, 0.13, 0.79, 0.20, 0.56, 0.92, 0.01, 0.60, 0.70,
          0.73, 0.13, 0.96, 0.27, 0.21, 0.88, 0.30, 0.15, 0.09,
          0.17, 0.25, 0.30, 0.32, 0.82, 0.98, 0.00],
    'y': [1.45, 1.93, 0.81, 0.61, 1.55, 0.95, 0.45, 1.14, 0.74,
          0.98, 1.41, 0.81, 0.89, 0.68, 1.39, 1.53, 0.91, 1.49,
          1.38, 1.73, 1.11, 1.68, 0.66, 0.69, 1.98]
})
```

### ||| Solution

The question is answered by Python. Start by loading data into and and estimating the parameters in Python:

```
fit = smf.ols('y ~ x1 + x2', data=df).fit()
print(fit.summary(slim=True))
```

```

                                OLS Regression Results
=====
Dep. Variable:                  y      R-squared:                0.940
Model:                          OLS    Adj. R-squared:           0.934
No. Observations:                25    F-statistic:              172.0
Covariance Type:                  nonrobust  Prob (F-statistic):      3.70e-14
=====

```

	coef	std err	t	P> t	[0.025	0.975]
Intercept	0.4335	0.066	6.571	0.000	0.297	0.570
x1	1.6530	0.095	17.355	0.000	1.455	1.851
x2	0.0039	0.075	0.053	0.958	-0.151	0.159

```

=====

```

```
# Residual standard deviation (error standard deviation estimate)
sigma = np.sqrt(fit.mse_resid) # fit.mse_resid or fit.scale
print(sigma)
```

```
0.11271746832914663
```

### ||| Solution

The parameter estimates are given in the first column, i.e.

$$\hat{\beta}_0 = 0.434,$$

$$\hat{\beta}_1 = 1.653,$$

$$\hat{\beta}_2 = 0.0039,$$

and the error variance estimate is  $\hat{\sigma}^2 = 0.11^2$ . The confidence intervals can be seen in the last two columns or calculated again in Python:



```
print(fit.conf_int(alpha=0.05))
```

	0	1
Intercept	0.296707	0.570387
x1	1.455467	1.850520
x2	-0.151292	0.159182

b) Still using confidence level  $\alpha = 0.05$  reduce the model if appropriate.

### ||| Solution

Since the confidence interval for  $\beta_2$  cover zero (and the  $p$ -value is much larger than 0.05), the parameter should be removed from the model to get the simpler model

$$y_i = \beta_0 + \beta_1 x_1 + \varepsilon_i, \quad \varepsilon_i \sim N(0, \sigma^2),$$

the parameter estimates in the simpler model are

```
fit = smf.ols('y ~ x1', data=df).fit()
print(fit.summary(slim=True))
```

```

                                OLS Regression Results
=====
Dep. Variable:                  y      R-squared:                0.940
Model:                          OLS    Adj. R-squared:           0.937
No. Observations:                25    F-statistic:              359.6
Covariance Type:                  nonrobust  Prob (F-statistic):      1.54e-15
=====

```

	coef	std err	t	P> t	[0.025	0.975]
Intercept	0.4361	0.044	9.913	0.000	0.345	0.527
x1	1.6512	0.087	18.963	0.000	1.471	1.831

```
=====
```

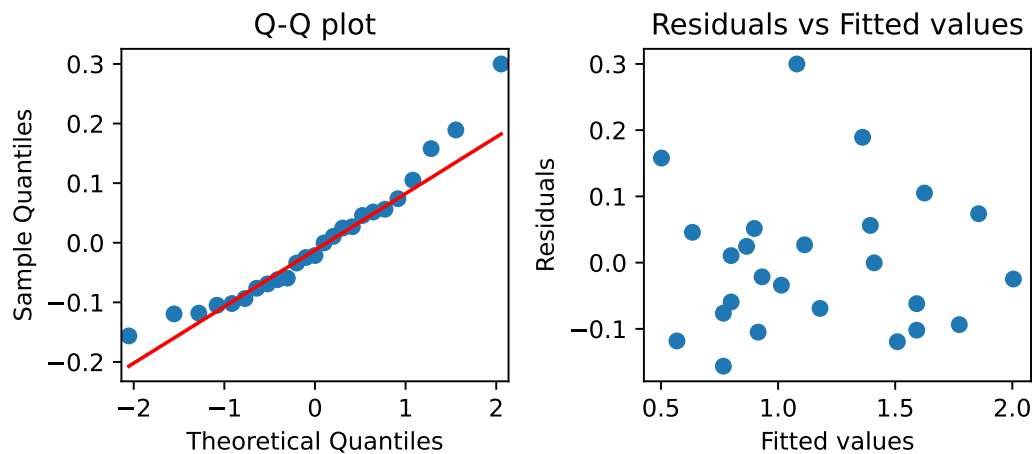
and both parameters are now significant.

c) Carry out a residual analysis to check that the model assumptions are fulfilled.

### ||| Solution

We are interested in inspecting a q-q plot of the residuals and a plot of the residuals as a function of the fitted values

```
# Predicted values for the data
ypred = fit.predict(df)
# Prepare plot
fig, ax = plt.subplots(1,2)
# Q-Q plot
sm.qqplot(df['y']-ypred, line="q",a=1/2, ax=ax[0])
ax[0].set_title("Q-Q plot")
# Scatter plot of residuals vs. fitted values
ax[1].scatter(fit.fittedvalues, df['y']-ypred)
ax[1].set_xlabel("Fitted values")
ax[1].set_ylabel("Residuals")
ax[1].set_title("Residuals vs Fitted values")
plt.tight_layout()
plt.show()
```



there are no strong evidence against the assumptions, the qq-plot is are a straight line and the are no obvious dependence between the residuals and the fitted values, and we conclude that the assumptions are fulfilled.

- d) Make a plot of the fitted line and 95% confidence and prediction intervals of the line for  $x_1 \in [0, 1]$  (it is assumed that the model was reduced above).

## ||| Solution

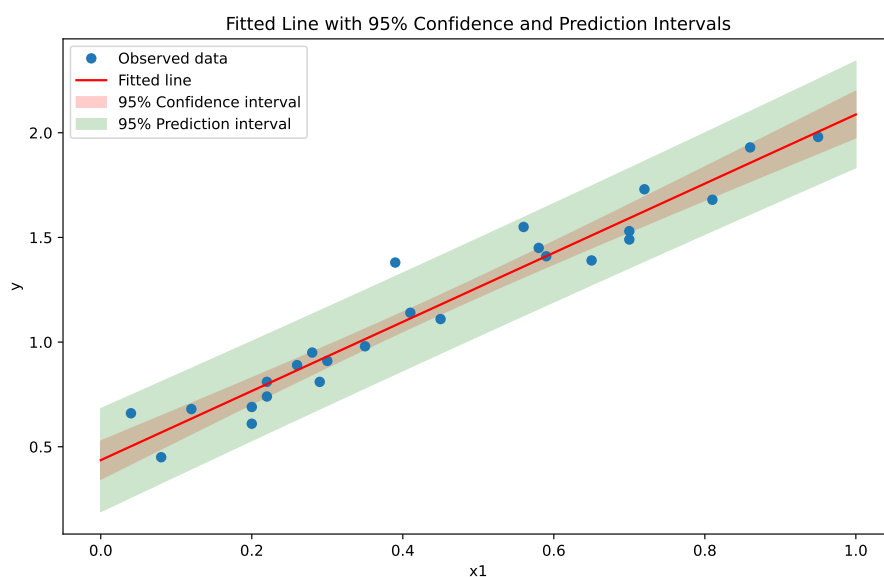
```

x1_new = pd.DataFrame({'x1': np.linspace(0, 1, 100)})

prediction_summary = fit.get_prediction(x1_new).summary_frame(alpha=0.05)

plt.figure(figsize=(10, 6))
plt.plot(df['x1'], df['y'], 'o', label='Observed data')
plt.plot(x1_new, prediction_summary['mean'], 'r-', label='Fitted line')
plt.fill_between(x1_new['x1'],
                 prediction_summary['mean_ci_lower'],
                 prediction_summary['mean_ci_upper'],
                 color='red', alpha=0.2, label='95% Confidence
interval')
plt.fill_between(x1_new['x1'],
                 prediction_summary['obs_ci_lower'],
                 prediction_summary['obs_ci_upper'],
                 color='green', alpha=0.2, label='95% Prediction
interval')
plt.xlabel('x1')
plt.ylabel('y')
plt.legend()
plt.title('Fitted Line with 95% Confidence and Prediction Intervals')
plt.show()

```



## 6.3 MLR simulation exercise

### |||| Exercise 6.3 MLR simulation exercise

The following measurements have been obtained in a study:

Nr.	1	2	3	4	5	6	7	8
$y$	9.29	12.67	12.42	0.38	20.77	9.52	2.38	7.46
$x_1$	1.00	2.00	3.00	4.00	5.00	6.00	7.00	8.00
$x_2$	4.00	12.00	16.00	8.00	32.00	24.00	20.00	28.00

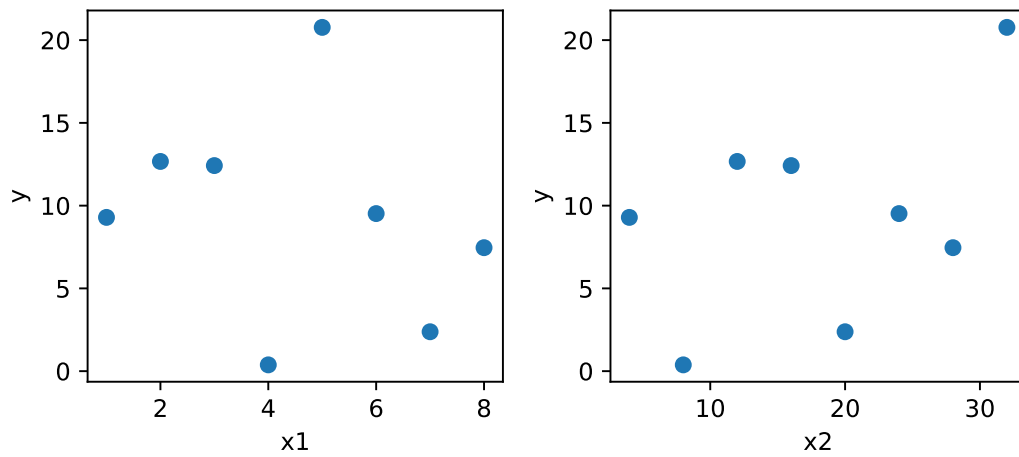
- a) Plot the observed values of  $y$  as a function of  $x_1$  and  $x_2$ . Does it seem reasonable that either  $x_1$  or  $x_2$  can describe the variation in  $y$ ?  
You may copy the following lines into Python to load the data

```
df = pd.DataFrame({
    'y': [9.29, 12.67, 12.42, 0.38, 20.77, 9.52, 2.38, 7.46],
    'x1': [1.00, 2.00, 3.00, 4.00, 5.00, 6.00, 7.00, 8.00],
    'x2': [4.00, 12.00, 16.00, 8.00, 32.00, 24.00, 20.00, 28.00]
})
```

### |||| Solution

The data is plotted with

```
fig, ax = plt.subplots(1, 2)
ax[0].scatter(df['x1'], df['y'])
ax[0].set_xlabel('x1')
ax[0].set_ylabel('y')
ax[1].scatter(df['x2'], df['y'])
ax[1].set_xlabel('x2')
ax[1].set_ylabel('y')
plt.tight_layout()
plt.show()
```



There does not seem to be a strong relation between  $y$  and  $x_1$  or  $x_2$ .

b) Estimate the parameters for the two models

$$Y_i = \beta_0 + \beta_1 x_{1,i} + \varepsilon_i, \quad \varepsilon_i \sim N(0, \sigma^2),$$

and

$$Y_i = \beta_0 + \beta_1 x_{2,i} + \varepsilon_i, \quad \varepsilon_i \sim N(0, \sigma^2),$$

and report the 95% confidence intervals for the parameters. Are any of the parameters significantly different from zero on a 5% confidence level?

## ||| Solution

The models are fitted with

```
fit1 = smf.ols('y ~ x1', data=df).fit()
fit2 = smf.ols('y ~ x2', data=df).fit()
print(fit1.conf_int())
```

```
              0          1
Intercept -0.542637  24.897637
x1         -3.144796   1.893129
```

```
print(fit2.conf_int())
```

```
              0          1
Intercept -7.558092  15.965949
x2         -0.295789   0.868825
```

since all confidence intervals cover zero we cannot reject that the parameters are in fact zero, and we would conclude neither  $x_1$  nor  $x_2$  explain the variations in  $y$ .

c) Estimate the parameters for the model

$$Y_i = \beta_0 + \beta_1 x_{1,i} + \beta_2 x_{2,i} + \varepsilon_i, \quad \varepsilon_i \sim (N(0, \sigma^2)), \quad (6-11)$$

and go through the steps of Method 6.16 (use confidence level 0.05 in all tests).

### ||| Solution

The model is fitted with

```
fit = smf.ols('y ~ x1 + x2', data=df).fit()
print(fit.summary(slim=True))
```

```

                                OLS Regression Results
=====
Dep. Variable:                    y      R-squared:                0.988
Model:                            OLS    Adj. R-squared:           0.983
No. Observations:                  8     F-statistic:              208.0
Covariance Type:                   nonrobust  Prob (F-statistic):      1.54e-05
=====

```

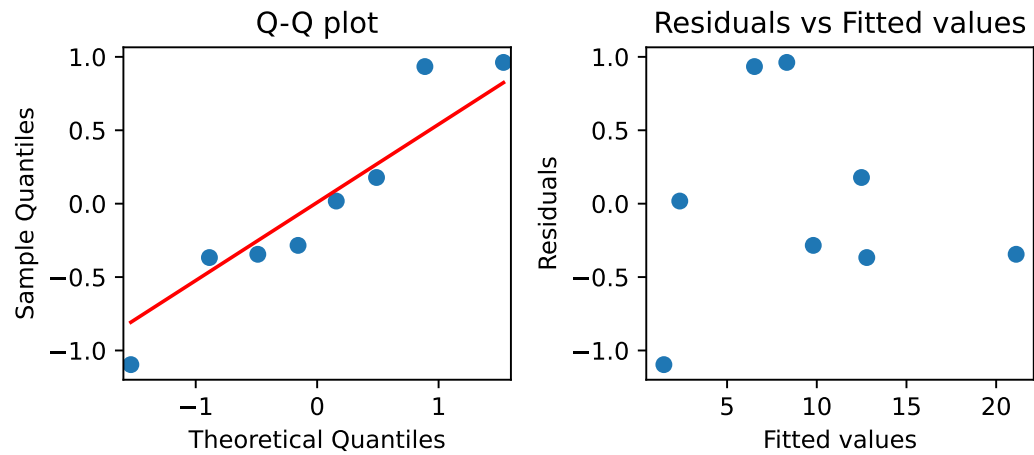
	coef	std err	t	P> t	[0.025	0.975]
Intercept	8.0325	0.673	11.939	0.000	6.303	9.762
x1	-3.5734	0.195	-18.280	0.000	-4.076	-3.071
x2	0.9672	0.049	19.790	0.000	0.842	1.093

```
=====
```

### ||| Solution

Before discussing the parameter let's have a look at the residuals:

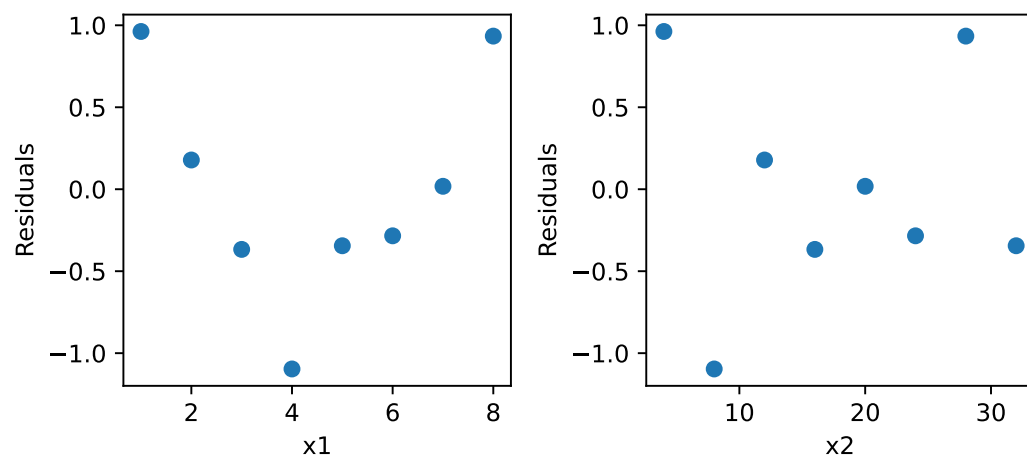
```
fig, ax = plt.subplots(1, 2)
sm.qqplot(fit.resid.values, line="q", a=1/2, ax=ax[0])
ax[0].set_title("Q-Q plot")
ax[1].scatter(fit.fittedvalues, fit.resid)
ax[1].set_xlabel("Fitted values")
ax[1].set_ylabel("Residuals")
ax[1].set_title("Residuals vs Fitted values")
plt.tight_layout()
plt.show()
```



There are no obvious structures in the residuals as a function of the fitted values and also there does not seem to be a serious departure from normality, but let's try to look at the residuals as a function of the independent variables anyway

### ||| Solution

```
fig, ax = plt.subplots(1, 2)
ax[0].scatter(df['x1'], fit.resid)
ax[0].set_xlabel('x1')
ax[0].set_ylabel('Residuals')
ax[1].scatter(df['x2'], fit.resid)
ax[1].set_xlabel('x2')
ax[1].set_ylabel('Residuals')
plt.tight_layout()
plt.show()
```





the plot of the residuals as a function of  $x_1$  suggest that there could be a quadratic dependence.

### ||| Solution

Now include the quadratic dependence of  $x_1$

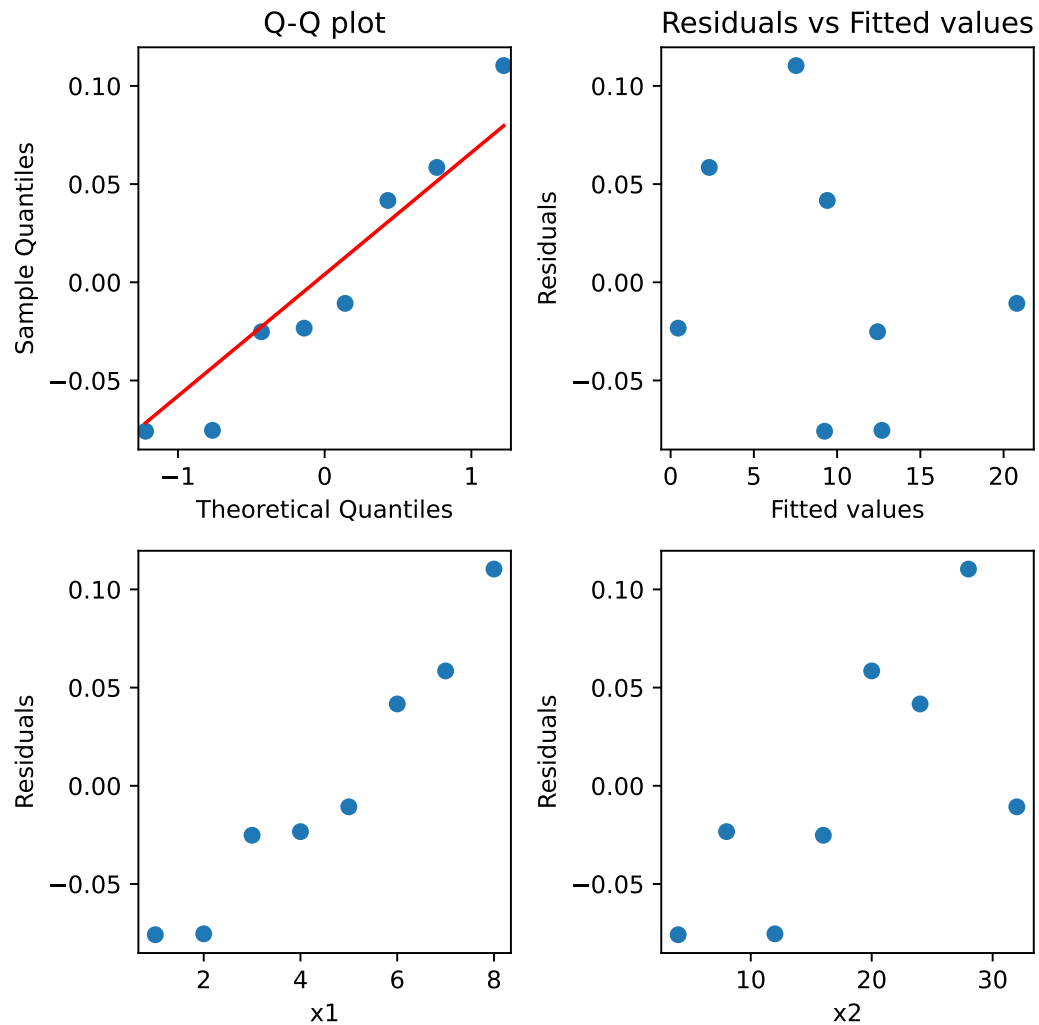
```
df['x3'] = df['x1']**2
fit3 = smf.ols('y ~ x1 + x2 + x3', data=df).fit()
print(fit3.summary(slim=True))
```

OLS Regression Results						
=====						
Dep. Variable:	y	R-squared:	1.000			
Model:	OLS	Adj. R-squared:	1.000			
No. Observations:	8	F-statistic:	1.257e+04			
Covariance Type:	nonrobust	Prob (F-statistic):	2.11e-08			
=====						
	coef	std err	t	P> t	[0.025	0.975]
-----						
Intercept	10.1007	0.121	83.334	0.000	9.764	10.437
x1	-5.0024	0.071	-70.549	0.000	-5.199	-4.806
x2	1.0006	0.005	185.205	0.000	0.986	1.016
x3	0.1474	0.007	21.067	0.000	0.128	0.167
=====						

we can see that all parameters are still significant, and we can do the residual analysis of the resulting model.

## ||| Solution

```
fig, ax = plt.subplots(2, 2)
sm.qqplot(fit3.resid, line="q", ax=ax[0, 0])
ax[0, 0].set_title("Q-Q plot")
ax[0, 1].scatter(fit3.fittedvalues, fit3.resid)
ax[0, 1].set_xlabel("Fitted values")
ax[0, 1].set_ylabel("Residuals")
ax[0, 1].set_title("Residuals vs Fitted values")
ax[1, 0].scatter(df['x1'], fit3.resid)
ax[1, 0].set_xlabel('x1')
ax[1, 0].set_ylabel('Residuals')
ax[1, 1].scatter(df['x2'], fit3.resid)
ax[1, 1].set_xlabel('x2')
ax[1, 1].set_ylabel('Residuals')
plt.tight_layout()
plt.show()
```



There are no obvious structures left and there is no departure from normality, and we can report the finally selected model as

$$Y_i = \beta_0 + \beta_1 x_{1,i} + \beta_2 x_{2,i} + \beta_3 x_{1,i}^2 + \varepsilon_i, \quad \varepsilon_i \sim (N(0, \sigma^2)),$$

with the parameters estimates given above.

- d) Find the standard error for the line, and the confidence and prediction intervals for the line for the points  $(\min(x_1), \min(x_2))$ ,  $(\bar{x}_1, \bar{x}_2)$ ,  $(\max(x_1), \max(x_2))$ .

### ||| Solution

The question is solved by

```
## New data
Dnew = pd.DataFrame({
    'x1': [np.min(df['x1']), np.mean(df['x1']), np.max(df['x1'])],
    'x2': [np.min(df['x2']), np.mean(df['x2']), np.max(df['x2'])],
    'x3': [np.min(df['x1'])**2, np.mean(df['x1'])**2,
np.max(df['x1'])**2]
})

# Summary frame
pred = fit3.get_prediction(Dnew).summary_frame(alpha=0.05)
print(round(pred,3))
```

	mean	mean_se	mean_ci_lower	mean_ci_upper	obs_ci_lower	obs_ci_upper
0	9.248	0.073	9.045	9.451	8.934	9.563
1	8.587	0.048	8.454	8.720	8.312	8.862
2	11.538	0.080	11.317	11.760	11.211	11.866

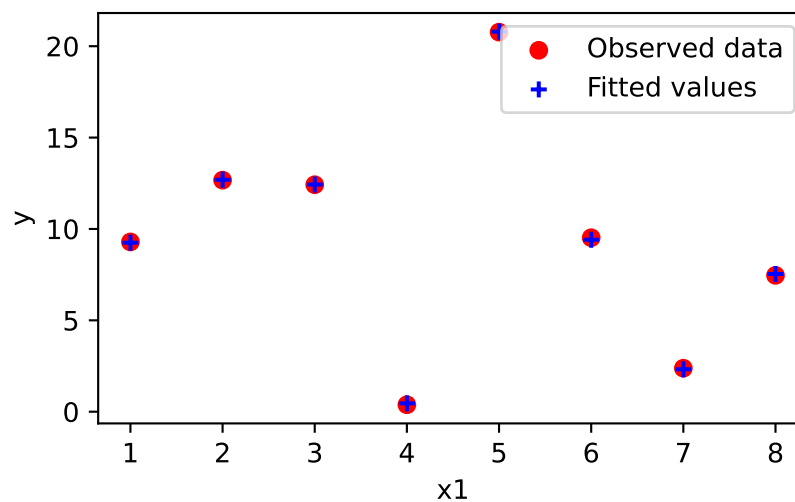
The standard error for line for the new points can be seen in "mean\_se" followed by the lower and upper bounds for the confidence and prediction intervals, respectively.

- e) Plot the observed values together with the fitted values (e.g. as a function of  $x_1$ ).

## ||| Solution

The question is solved by

```
plt.figure()
plt.scatter(df['x1'], df['y'], marker='o', color='red', label='Observed
data')
plt.scatter(df['x1'], fit3.fittedvalues, marker='+', color='blue',
label='Fitted values')
plt.xlabel('x1')
plt.ylabel('y')
plt.legend()
plt.tight_layout()
plt.show()
```



Notice that we have an almost perfect fit when including  $x_1$ ,  $x_2$  and  $x_1^2$  in the model, while neither  $x_1$  nor  $x_2$  alone could predict the outcomes.